
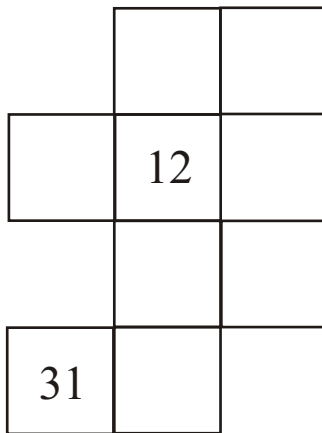
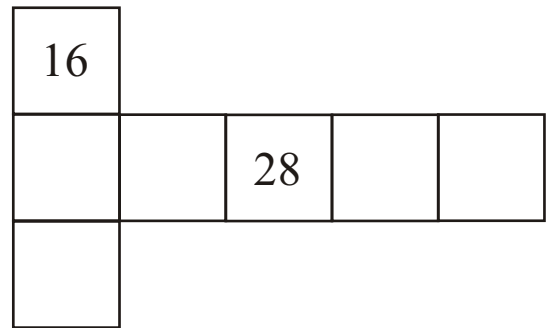
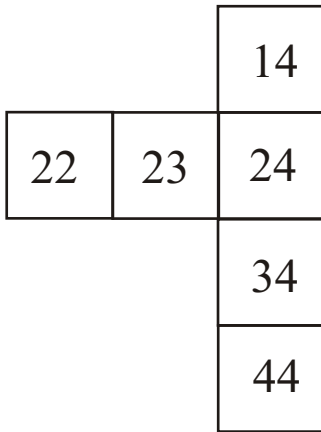


The squares below are taken from the 1-50 number chart. Think of the numbers in that chart and fill in the numbers in the empty squares below. The first one is done for you.



**Look at the rule given on top of each table and fill in the numbers:**

**Rule : Add 2**

A.

Start	Finish
3	5
4	
6	
8	
10	

**Rule : Add 3**

B.

Start	Finish
2	5
4	
7	
5	
9	

**Rule : Add 4**

C.

Start	Finish
1	5
3	
5	
7	
9	

**Rule : Add 5**

D.

Start	Finish
2	7
3	
5	
6	
8	

**Expand these numbers, then add. The first one has been done for you.**

$$\begin{aligned} 1. \quad 33 + 26 &= 30 + 3 + 20 + 6 \\ &= 50 + 9 \\ &= 59 \end{aligned}$$

$$2. \quad 23 + 52 =$$

$$3. \quad 41 + 54 =$$

$$4. \quad 63 + 22 =$$

$$5. \quad 51 + 32 =$$