
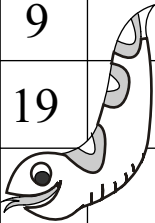



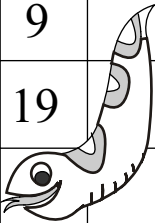



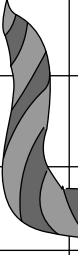
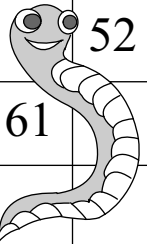
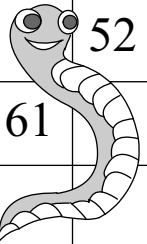
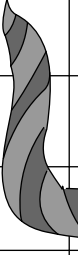


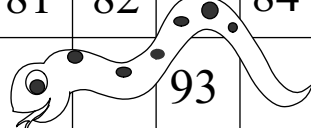
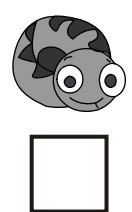


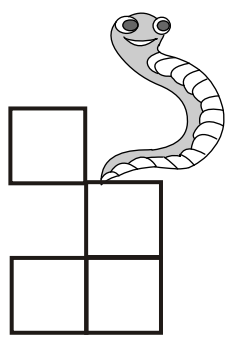

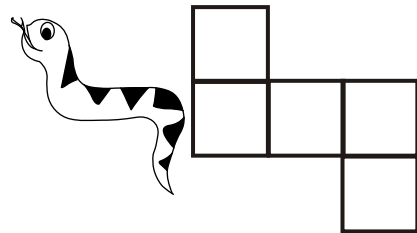
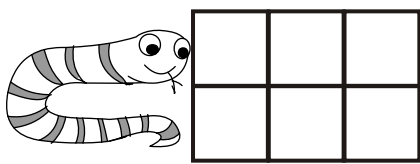







### Which numbers are the snakes hiding?

|   |  |   |   |   |  |    |    |  |  |
|---|--|---|---|---|--|----|----|--|--|
| 1   | 2  | 3   | 4   | 5   |   | 7  | 8  | 9  |  |
| 11  | 12   | 13  |  | 15  |   | 18 | 19 |  |  |
| 21  | 22   | 23  | 24  |    | 26   | 27 | 28 |  |  |
| 31  |  |  | 35  | 36  |   | 38 | 39 | 40   |  |
| 41  |   |   | 45  |   | 47   | 48 | 49 | 50   |  |
|   | 52   | 53  | 54  | 55  |  | 57 | 58 | 59   | 60   |
| 61  |  | 63  | 64  | 65  |  | 69 | 70 |  |  |
|   |  | 73  | 74  |  | 76   | 77 | 78 | 79   | 80   |
| 81  | 82   |   | 84  |   |  | 88 |    |  |  |
|  |  | 93  |   | 95  | 96   | 98 |    |  |  |





**Which is double, A or B? For each shape, tick one.**

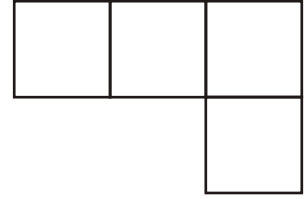
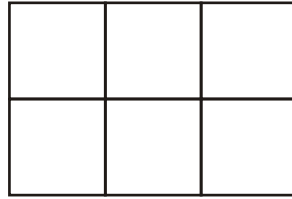
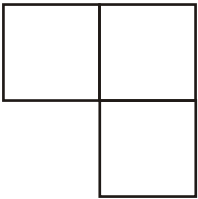
**A**

**B**

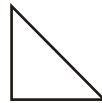
1.




2.



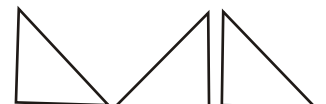
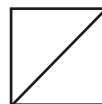
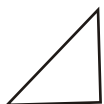
3.



4.



5.





**Fill in the blanks. In each question you have to use only one of these numbers repeatedly. : 100 , 50 , 25 , 20 , 10**

1.  $50 = \underline{\quad} + \underline{\quad} + \underline{\quad} + \underline{\quad} + \underline{\quad}$

2.  $50 = \underline{\quad} + \underline{\quad}$

3.  $100 = \underline{\quad} + \underline{\quad}$

4.  $100 = \underline{\quad} + \underline{\quad} + \underline{\quad} + \underline{\quad}$

5.  $100 = \underline{\quad} + \underline{\quad} + \underline{\quad} + \underline{\quad} + \underline{\quad}$

6.  $100 = \underline{\quad} + \underline{\quad} + \underline{\quad} + \underline{\quad} + \underline{\quad}$

$\underline{\quad} + \underline{\quad} + \underline{\quad} + \underline{\quad} + \underline{\quad}$

7.  $200 = \underline{\quad} + \underline{\quad}$

8.  $200 = \underline{\quad} + \underline{\quad} + \underline{\quad} + \underline{\quad}$