



Circle the numbers with :

- | | | | |
|------------------------------|------|------|------|
| 1. 6 in the hundreds place | 3466 | 2601 | 6962 |
| 2. 5 in the thousands place | 5341 | 2456 | 2465 |
| 3. 3 in the thousands place | 4367 | 3875 | 3201 |
| 4. 7 in the tens place | 7071 | 5746 | 6875 |
| 5. 9 in the units place | 9349 | 7029 | 3491 |
| 6. 8 in the hundreds place | 3781 | 4856 | 7888 |
| 7. 4 in the tens place | 5946 | 7140 | 2943 |
| 8. 2 in the tens place | 1206 | 3428 | 9726 |
| 9. 1 in the hundreds place | 7176 | 5019 | 2136 |
| 10. 3 in the hundreds place | 2349 | 1136 | 9043 |
| 11. 6 in the thousands place | 6482 | 6100 | 3006 |
| 12. 5 in the tens place | 4750 | 8125 | 6954 |



Match the following . The first one is done for you. Try and do it mentally!


1. (a) $7850 - 7000$ → 7050
(b) $7850 - 850$ → 7000
(c) $7850 - 800$ → 7800
(d) $7850 - 50$ → 850

2. (a) $9475 - 475$ → 9075
(b) $9475 - 9000$ → 9000
(c) $9475 - 400$ → 9400
(d) $9475 - 75$ → 475

3. (a) $6320 - 20$ → 320
(b) $6320 - 300$ → 6300
(c) $6320 - 6000$ → 6000
(d) $6320 - 320$ → 6020

Arrange the containers according to the amount of water they are holding. The first one is done for you.

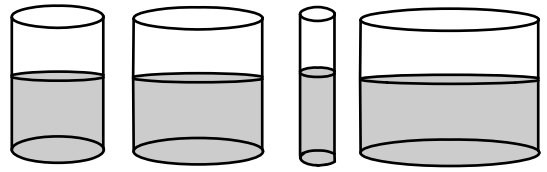
1.



A B C D

 B C A D
most least


2.



E F G H

_____ _____
most least


3.



I J K

_____ _____
least most

4.



L M N

_____ _____
least most